

Datum: _____ Name: _____

1) Trage folgende Beträge in die €-Tafel ein:

12,30 €

-,05 €

25 ct


€ Z	€ E	ct Z	ct E

120 ct

10 €

-,12 €

€ Z	€ E	ct Z	ct E



300 ct

30 ct

3 ct

€ Z	€ E	ct Z	ct E

21 €

3,03 €

12,40 €

€ Z	€ E	ct Z	ct E

Datum: _____ Name: _____

2.) Rechne diese ct - Beträge in € um:

$$20 \text{ ct} = 0,20 \text{ €}$$

$$24 \text{ ct} = 0, ____ \text{ €}$$

$$5 \text{ ct} = 0, ____ \text{ €}$$

$$11 \text{ ct} = 0, ____ \text{ €}$$

$$1 \text{ ct} = 0, ____ \text{ €}$$

$$66 \text{ ct} = 0, ____ \text{ €}$$



3.) Rechne diese € - Beträge in ct um:

$$1 \text{ €} = 100 \text{ ct}$$

$$0,50 \text{ €} = 50 \text{ ct}$$

$$1,23 \text{ €} = ____ \text{ ct}$$

$$2,35 \text{ €} = ____ \text{ ct}$$

$$15 \text{ €} = ____ \text{ ct}$$


$$6,69 \text{ €} = ____ \text{ ct}$$

$$12 \text{ €} = ____ \text{ ct}$$


$$9,99 \text{ €} = ____ \text{ ct}$$

Datum: _____ Name: _____

4.) Ist es gleich viel Geld? Entscheide, welches Zeichen passt!




= ____ , ____ €




= ____ , ____ €




= ____ , ____ €




= ____ , ____ €




= ____ , ____ €




= ____ , ____ €



= ____ , ____ €




= ____ , ____ €



Datum: _____ Name: _____



5.) Schreibe den Geldbetrag in Kommaschreibweise!



= _____ , _____ €



= _____ , _____ €




= _____ , _____ €




= _____ , _____ €

Datum: _____


Name: _____




= _____ , _____ €




= _____ , _____ €



= _____ , _____ €



= _____ , _____ €



= _____ , _____ €